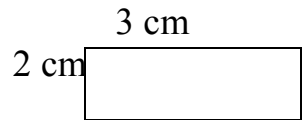


Review of Plane Figures

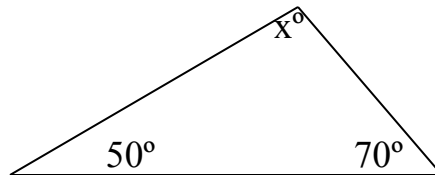
1. Name something that is one-dimensional. _____
2. Name something that is two-dimensional. _____
3. Name something that is three-dimensional. _____
4. What is a plane figure? _____
5. Is a triangle an open or closed figure? _____
6. Is the letter Z an open or closed figure? _____
7. Name 5 different types of polygons. _____,
_____, _____, _____, _____

8. What are the units of measure in the picture? _____

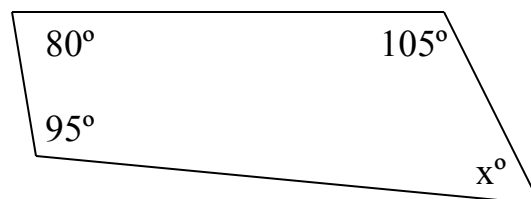


9. What is an isosceles triangle? _____
10. What is an equilateral triangle? _____

11. Find x . _____



12. Find x . _____



Define the following.

13. square-

14. rectangle-

15. rhombus-

16. trapezoid-

17. parallelogram-

18. quadrilateral-